

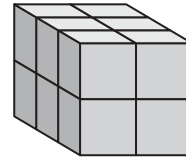
Understanding of Volume

Name: _____

1 Write an addition equation to find the volume of the prism.

Write a multiplication equation to find the volume of the prism.

The volume is _____ cubic units.

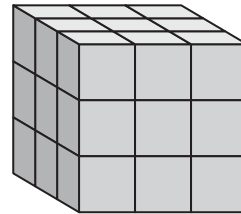


1 unit cube

2 Write an addition equation to find the volume of the prism.

Write a multiplication equation to find the volume of the prism.

The volume is _____ cubic units.




1 unit cube

3 Write an addition equation to find the volume of the prism.

Write a multiplication equation to find the volume of the prism.

The volume is _____ cubic units.

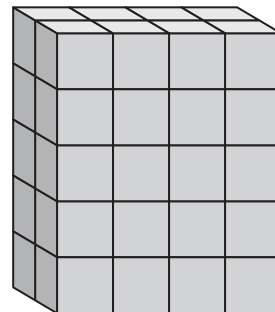


1 unit cube

4 Write an addition equation to find the volume of the prism.

Write a multiplication equation to find the volume of the prism.

The volume is _____ cubic units.



1 unit cube

5 Which method do you like best? Explain why.