



March 16, 2020

Hello EPS student (Grade 2),

Keeping your head in the game is very important - even when you are not physically in your school building. We've created English Language Arts and Math packets to provide you with opportunities to enhance the skills you've been working on the past several months.

Some of the passages and/or questions may seem easy while others may be a bit challenging. It is important to complete the lessons to the best of your ability. We included a wide variety of topics and activities to keep you engaged.

You can work at your own pace. We don't expect you to complete everything in one day. If you finish the packet, our best advice is to read for pleasure.

When school begins again, simply bring these packets to your teachers for review.

If you need anything or have questions about the school closing, your parents can call our administration building at (814) 874-6000.

Be sure to take care of yourself. Get plenty of rest, eat well, and make sure you are washing your hands with soap and water several times a day.

We will see you all after the break.

Mr. Polito, Superintendent

Mrs. Habursky, Assistant Superintendent

6. "What Are Fables?"

The fables lots of people know were said to be told by a	13
man named Aesop ("ee-sop"). He lived in Greece long, long	22
ago. Aesop wanted people to treat each other nicely. He knew	33
that people do not like to be told when they are not nice.	46
So, he wrote many of his stories about animals. His animal	57
characters did all of the things people do that can make	68
trouble! They told fibs and cheated, and they were lazy. At the	80
end of each story, Aesop gave a moral, or lesson, for the story	93
so people might think of ways to be nicer.	102

Word Count: 102 words

7. "Mr. Finney's Turnip"

By Henry Wadsworth Longfellow

Mr. Finney had a turnip	5
And it grew, and it grew,	11
And it grew behind the barn,	17
And the turnip did no harm.	23
And it grew, and it grew,	29
Till it could grow no taller;	35
Then Mr. Finney took it up	41
And put it in the cellar.	47
There it lay, there it lay,	53
Till it began to rot;	58
When his daughter Susie washed it	64
And put it in the pot.	70
Then she boiled it and boiled it,	77
As long as she was able;	83
Then his daughter Susie took it	89
And put it on the table.	95
Mr. Finney and his wife	100
Both sat down to sup;	105
And they ate, and they ate,	111
Until they ate the turnip up.	117

Word Count: 117 words

8. "Rabbits and Hares"

You may have heard the story about the tortoise and the hare. Your first question may have been, "What is a hare?"	11
Well, a hare is like a rabbit and it is not like a rabbit!	22
Let's compare.	36
Hares are bigger, faster, and stronger than rabbits. They have longer ears, feet, and legs. When a hare feels that danger is near, it will run a long, long way to escape. Hares like to live alone in an underground burrow.	38
Rabbits are a bit smaller from head to toe than hares. When a rabbit feels that danger is near it will quickly hop to a hiding place. Rabbits like to live together in nests above ground.	47
Rabbits and hares do look very much alike. But they are different, too!	59
	74
	79
	90
	103
	114
	115
	126
	128

Word Count: 128 words

9. "Kate, the Author!"

Two characters: Nan and Gran

Eight year old Kate and her grandmother Nan are leaving a book store, after just having met an author. They are walking to the car.

Kate: Nan, I'd like to write a book! 7

Nan: That is a fantastic idea! I will help you, if you need help. 20

May I do the art for your book? 28

Kate: Oh, yes! Thank you. 32

Kate and Nan arrive at home. Kate gets her writing supplies and sits down at the table. She has been working for 20 minutes.

Nan: How is your book coming along? 38

Kate: I wrote down all of the cool things I did at your house 51

this summer. Once I got started, it went fast! 60

Nan: Sometimes when you write, you have to write things two 70

or three times to get the best words and the best word order. 83

Kate: Yes, at school it is called Plan-Draft-Edit-Write. It is a big 94

help! 95

Nan: What sort of book are you writing? 102

Kate: This is a book about my adventures out west while I was 114

visiting you! 116

Nan: I am very happy that you want to tell other children about 128

your summer with me here in the West. 136

Three weeks later, back at her own home, Kate's dad takes her to the printer's office.

Printer: This book is very well written. Children out there will like this book! 146
149

Kate: Thank you. 151

Printer: I would like to print your book, if that is alright with you. 163
164

Kate: YIPPEE!! 165

Word Count: 165 words

10. "The Blind Men and the Elephant"

Once there were six blind men who wanted to know what an elephant was.	11 14
The first blind man stretched his hands and felt the elephant's side. "I can feel it," the man said. "The elephant is like a big sturdy wall."	24 36 41
The second man was standing near the elephant's head. He put his hand on the long, sharp tusk. "A wall?" he said. "No, the elephant is not like a wall, it's like a spear."	50 63 75
The third man reached around the elephant's leg with both arms. He said, "I am sure both of you are wrong. The elephant is more like a tree."	85 98 103
The fourth man reached up and touched the elephant's ear. "All of you are wrong! An elephant is like a fan," he said.	112 126
Now, the fifth man was standing by himself at the elephant's other end. He happened to grab the animal's tail. "Really, I don't know where you people get these ideas," he said. "I can tell you an elephant is like a rope."	136 146 157 168
The elephant tickled the sixth man with his trunk. Then he said with a shudder, "All of you are wrong. It is clear to me that the elephant is a very large snake."	179 194 201
"Nonsense!" said the others as they quietly began to leave.	211
The men never bothered to put their heads together to understand what the elephant was really like.	221 228

Word Count: 228 words

11. "Pop-Corn"

by Evaleen Stein

Pop! Pop!—Poppetty-pop!	3
Shake and rattle and rattle and shake	10
The golden grains as they bounce and break	18
To fluffy puffiness—Poppetty-pop!	22
Bursting and banging the popper's top!	28
Poppetty-pop!	29
Pop! Pop!	31
The yellow kernels, oh, see them grow	38
White as cotton or flakes of snow!	45
Pop! Pop!	47
O-ho, how they frolic and fly about	54
And turn themselves suddenly inside out!	60
Pop-pop-poppetty! Pop-pop-pop!	62
The popper's full and we'll have to stop;	70
Pile the bowl with the tempting treat,	77
Children, come, it is time to eat!	84

Word Count: 84 words

12. "Fern Looks at the Stars"

Two characters: Fern and Dad

Fern: Dad, Dad! The stars are beginning to shine! 8

Dad: Grab your sweater. I'll get the folding lawn chairs. 17

(Dad and Fern go to the backyard, set up the chairs, and gaze at the sky.)

Dad: Do you see how round the moon looks tonight? 26

Fern: The stars are sparkling! 30

Dad: Stars are made of gas and fire. Our sun is a star, made of gas and fire, too. The stars are far, far away...past the houses, trees, and clouds. 44
57
60

Fern: My teacher says groups of stars look like shapes of things and they have special names. 70
76

Dad: That's right. This group looks like a dog. *(He points to a group of stars.)* That set looks like a dipper or cup. *(He points to another group of stars.)* There is the North Star!! *(He points to the North Star.)* 84
92
97

(It is late. Fern and her dad fold the chairs and walk to the house.)

Fern: Thank you for sharing the stars with me. Dad, I want to be a scientist and study the stars when I grow up! 109
120

Word Count: 120 words

13. "Twins!"

Brittany and Brianna Winner are identical twins. Brittany	8
started selling her artwork to local stores when she was	18
six years old! At age seven, Brianna sang in front of many	30
audiences. One audience was over 30,000 people! Then, at	39
the end of fourth grade, they decided to write a book together.	51
It took nine months to finish the story. Can you guess what	63
happened? Their first book won many awards, it was a <i>best</i>	74
<i>seller!</i> The twins wrote more books and today over 65,000	84
schools use Brittany's and Brianna's books. Their books are	93
sold at book stores all over America. The first book they wrote	105
will be made into a movie.	111
Brittany and Brianna are great examples of children	119
excelling!	120

Word Count: 120 words

14. "Spelling Bees"

Spelling Bees have been held for about 200 years. Some	10
experts believe spelling bees started in America! These	18
contests were started to give students a way to practice their	29
spelling words. People who write about history think that the	39
contests may have first been called a spelling match. The word	50
match is used here as you would use it to name a contest like	64
a tennis or golf match. Historians are not sure how use of the	77
word <i>bee</i> came about. There are some good guesses, but	87
no one seems one hundred percent certain. Today, the most	97
famous spelling bee is the National Spelling Bee held every	107
May. This contest is so popular it can be seen on television.	119
Start practicing!	121

Word Count: 121 words

15. **“How Many Seconds In A Minute?”**


by Christina Georgina Rossetti

How many seconds in a minute?	6
Sixty, and no more in it.	12
How many minutes in an hour?	18
Sixty for sun and shower.	23
How many hours in a day?	29
Twenty-four for work and play.	34
How many days in a week?	40
Seven both to hear and speak.	46
How many weeks in a month?	52
Four, as the swift moon runneth.	58
How many months in a year?	64
Twelve the almanack makes clear.	69
How many years in an age?	75
One hundred says the sage.	80
How many ages in time?	85
No one knows the rhyme.	90

Word Count: 90

A Cool Pool!

by ReadWorks




The day was hot. The sunshine was warm. Ava's mother filled the wading pool.

"May I get in?" Ava asked.


She jumped into her pool. Brrrr! It felt cold. This was not fun! Ava's mother called her for lunch. Later, Ava got back into her pool. Now the water felt warm. Ava splashed and laughed.

Name: _____ Date: _____

1. What is the weather like in the story?



cool and cloudy



hot and sunny

2. What is Ava doing today?

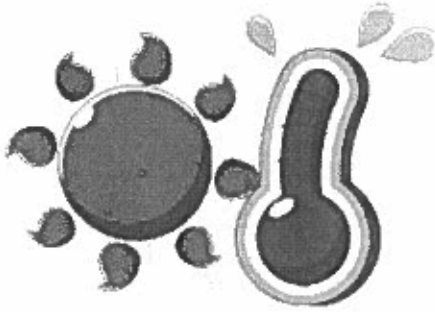


swimming in her pool



playing at the park

3. How did the water feel when Ava jumped into her pool in the morning?




warm



cold

4. How did the water feel when Ava got back into her pool after lunch?



warm



cold

5. When does Ava have fun splashing and laughing in her pool?

6. What did you learn from "A Cool Pool"?

7. Draw a picture of Ava splashing and laughing in her pool.

A Dog Is a Mammal

by Rachelle Kreisman



Every dog is a mammal. All mammals have hair on their bodies. People, horses, and elephants are also mammals.

Hair protects a mammal's skin. The hair keeps skin from getting scraped. Hair also protects mammals from cold and heat.

What else makes an animal a mammal? Here are some examples.

Every mammal has a backbone. That bone is also called the spine.

Mammals are warm-blooded. That means the temperature in their bodies is warm and usually stays the same.

Female mammals make milk in their bodies. They feed the milk to their babies.

Name: _____ Date: _____

1. What does every mammal have?

- A. hair and a backbone
- B. scales
- C. a tail

2. This text describes the characteristics of mammals. Which of the following animals are mammals?

- A. birds, eagles, and penguins
- B. people, horses, and elephants
- C. snakes, lizards, and crocodiles

3. Mammals have hair and backbones. Dogs are mammals. Based on this information, what is true about dogs?

- A. Dogs have hair. Dogs do not have backbones.
- B. Dogs have both hair and backbones.
- C. Dogs have backbones. Dogs do not have hair.

4. What is "A Dog Is a Mammal" mostly about?

- A. how hair protects mammals
- B. dogs and other pets
- C. the characteristics of mammals

5. Name something that dogs and people have in common.

One thing that dogs and people have in common is

6. What did you learn from "A Dog Is a Mammal"?

7. Class Discussion Question: Explain whether a mammal's backbone or a mammal's hair would help it stay warm in cold weather. Use information from the text to support your answer.

8. Draw a picture of a mammal. Try to label something that makes it a mammal.

Take Care of Your Teeth

by ReadWorks



You need healthy teeth. Do you know why? Your teeth help you eat. They help you talk.

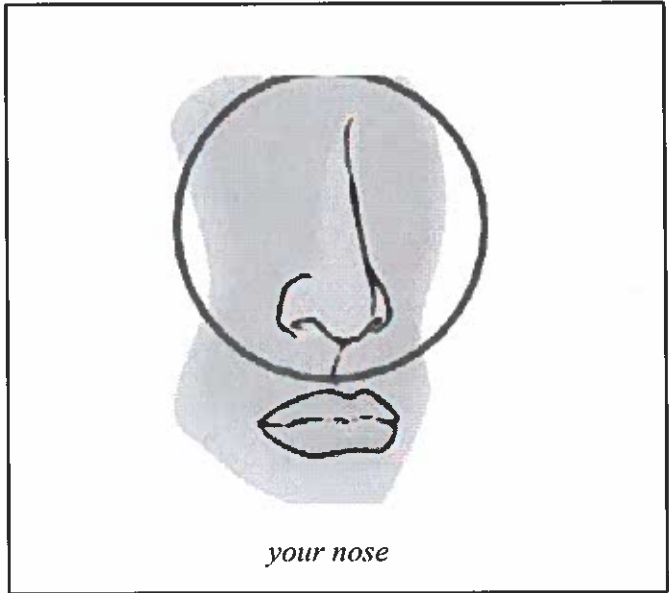
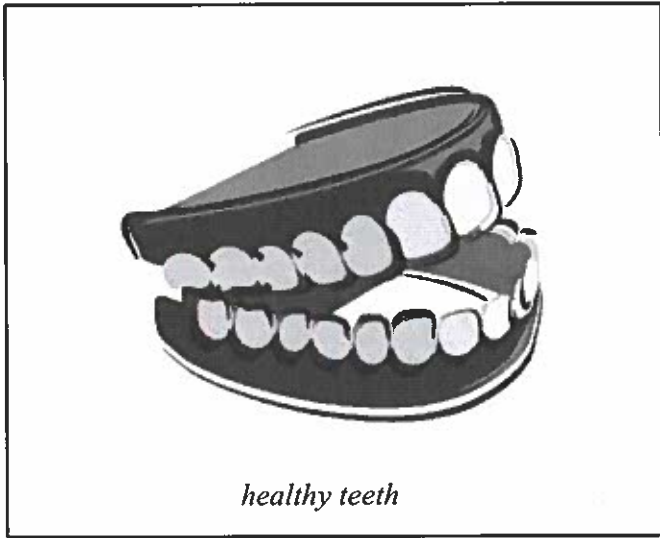
Here are some ways to care for your teeth:

- Brush your teeth after you eat.
- Eat healthful foods.
- Have a grown-up help you floss your teeth.
- Visit the dentist two times each year.


And don't forget to smile!

Name: _____ Date: _____

1. What do you need to help you eat and talk?



2. What should you do after you eat to care for your teeth?




Blank rectangular box for student response.

Blank rectangular box for student response.

3. What kind of food should you eat?



healthy food



junk food

4. Who can help you floss your teeth?



a grown-up



your dog

5. How many times should you visit the dentist each year?

6. What did you learn from "Take Care of Your Teeth!"?

7. Draw a person caring for his or her teeth.

Fluency Table of Contents

	Page		Page
Addition Facts		Subtraction Within 100	
Skills Practice (Forms A and B)		Skills Practice (Forms A and B)	
Find sums to 10.	310	Subtract a 1-digit number from a 2-digit number.	332
Find sums from 11 to 20.	312	Subtract 2-digit numbers.	334
Find sums to 20.	314	Repeated Reasoning	
Repeated Reasoning		Find place value patterns.	
Find patterns with sums near 10.	316	Find patterns with problems that have the same answer.	
Find patterns in adding 9.	317		
Subtraction Facts		Addition and Subtraction Within 100	
Skills Practice (Forms A and B)		Skills Practice (Forms A and B)	
Subtract within 10.	318	Add or subtract.	338
Subtract from teen numbers.	320	Add and subtract 10 and 100.	340
Subtract within 20.	322	Find sums up to 1,000.	342
Repeated Reasoning		Subtract from 3-digit numbers.	344
Find patterns when you subtract from 9 or 11.	324	Add several 2-digit numbers.	346
Find patterns with differences of 9.	325	Repeated Reasoning	
Addition Within 100		Find place value patterns in addition.	
Skills Practice (Forms A and B)		Find place value patterns in subtraction.	
Add a 2-digit and a 1-digit number.	326		
Add 2-digit numbers.	328		
Repeated Reasoning			
Find regrouping patterns.	330		
Find more regrouping patterns.	331		



Addition Facts—Skills Practice

Find sums to 10.

Form A

1 $2 + 2 =$ _____

2 $3 + 4 =$ _____

3 $1 + 5 =$ _____

4 $3 + 5 =$ _____

5 $7 + 1 =$ _____

6 $8 + 1 =$ _____

7 $8 + 2 =$ _____

8 $6 + 2 =$ _____

9 $3 + 7 =$ _____

10 $8 + 0 =$ _____

11 $4 + 5 =$ _____

12 $3 + 3 =$ _____

13 $2 + 5 =$ _____

14 $5 + 2 =$ _____

15 $6 + 3 =$ _____

16 $4 + 4 =$ _____

17 $7 + 3 =$ _____

18 $5 + 4 =$ _____

19 $5 + 3 =$ _____

20 $0 + 5 =$ _____

21 $2 + 8 =$ _____

22 $2 + 7 =$ _____

23 $4 + 6 =$ _____

24 $3 + 2 =$ _____

25 $5 + 5 =$ _____

26 $3 + 6 =$ _____

27 $1 + 9 =$ _____

28 $4 + 3 =$ _____

29 $7 + 2 =$ _____

30 $2 + 4 =$ _____

Addition Facts—Skills Practice

Find sums to 10.

Form B

1 $3 + 1 =$ _____

2 $4 + 2 =$ _____

3 $7 + 2 =$ _____

4 $5 + 5 =$ _____

5 $3 + 2 =$ _____

6 $9 + 1 =$ _____

7 $6 + 3 =$ _____

8 $6 + 4 =$ _____

9 $0 + 7 =$ _____

10 $4 + 4 =$ _____

11 $5 + 3 =$ _____

12 $1 + 5 =$ _____

13 $4 + 6 =$ _____

14 $2 + 8 =$ _____

15 $3 + 3 =$ _____

16 $9 + 0 =$ _____

17 $3 + 5 =$ _____

18 $2 + 6 =$ _____

19 $3 + 4 =$ _____

20 $7 + 3 =$ _____

21 $2 + 5 =$ _____

22 $6 + 1 =$ _____

23 $8 + 2 =$ _____

24 $3 + 6 =$ _____

25 $1 + 4 =$ _____

26 $4 + 5 =$ _____

27 $3 + 7 =$ _____

28 $6 + 2 =$ _____

29 $1 + 6 =$ _____

30 $5 + 4 =$ _____



Addition Facts—Skills Practice

Find sums from 11 to 20.

Form A

1 $6 + 6 =$ _____

2 $6 + 7 =$ _____

3 $9 + 2 =$ _____

4 $8 + 3 =$ _____

5 $4 + 8 =$ _____

6 $8 + 8 =$ _____

7 $9 + 6 =$ _____

8 $7 + 6 =$ _____

9 $8 + 5 =$ _____

10 $9 + 3 =$ _____

11 $4 + 9 =$ _____

12 $9 + 9 =$ _____

13 $5 + 9 =$ _____

14 $7 + 4 =$ _____

15 $7 + 8 =$ _____

16 $8 + 4 =$ _____

17 $5 + 6 =$ _____

18 $4 + 7 =$ _____

19 $9 + 8 =$ _____

20 $9 + 4 =$ _____

21 $8 + 6 =$ _____

22 $6 + 5 =$ _____

23 $7 + 9 =$ _____

24 $7 + 5 =$ _____

25 $6 + 8 =$ _____

26 $7 + 7 =$ _____

27 $8 + 9 =$ _____

28 $8 + 7 =$ _____

29 $9 + 5 =$ _____

30 $5 + 7 =$ _____

Addition Facts—Skills Practice

Find sums from 11 to 20.

Form B

1 $9 + 2 =$ _____

2 $9 + 6 =$ _____

3 $6 + 5 =$ _____

4 $5 + 8 =$ _____

5 $8 + 8 =$ _____

6 $9 + 3 =$ _____

7 $7 + 6 =$ _____

8 $3 + 8 =$ _____

9 $5 + 9 =$ _____

10 $8 + 4 =$ _____

11 $6 + 6 =$ _____

12 $9 + 7 =$ _____

13 $3 + 9 =$ _____

14 $7 + 7 =$ _____

15 $5 + 6 =$ _____

16 $9 + 8 =$ _____

17 $4 + 9 =$ _____

18 $8 + 6 =$ _____

19 $9 + 5 =$ _____

20 $6 + 8 =$ _____

21 $9 + 9 =$ _____

22 $5 + 7 =$ _____

23 $7 + 9 =$ _____

24 $7 + 4 =$ _____

25 $8 + 3 =$ _____

26 $7 + 5 =$ _____

27 $7 + 8 =$ _____

28 $6 + 9 =$ _____

29 $9 + 4 =$ _____

30 $8 + 9 =$ _____



Addition Facts—Skills Practice

Form A

Find sums to 20.

1 $9 + 1 =$ _____

2 $8 + 4 =$ _____

3 $5 + 6 =$ _____

4 $2 + 7 =$ _____

5 $8 + 0 =$ _____

6 $6 + 8 =$ _____

7 $7 + 9 =$ _____

8 $5 + 5 =$ _____

9 $4 + 9 =$ _____

10 $6 + 4 =$ _____

11 $1 + 5 =$ _____

12 $3 + 3 =$ _____

13 $9 + 6 =$ _____

14 $5 + 4 =$ _____

15 $7 + 3 =$ _____

16 $0 + 2 =$ _____

17 $2 + 8 =$ _____

18 $9 + 8 =$ _____

19 $3 + 9 =$ _____

20 $7 + 8 =$ _____

21 $4 + 5 =$ _____

22 $2 + 2 =$ _____

23 $6 + 6 =$ _____

24 $2 + 9 =$ _____

25 $8 + 7 =$ _____

26 $1 + 8 =$ _____

27 $4 + 6 =$ _____

28 $3 + 4 =$ _____

29 $5 + 8 =$ _____

30 $9 + 9 =$ _____

Addition Facts—Skills Practice

Find sums to 20.

Form B

1 $4 + 2 =$ _____

2 $5 + 3 =$ _____

3 $8 + 5 =$ _____

4 $7 + 7 =$ _____

5 $9 + 4 =$ _____

6 $0 + 4 =$ _____

7 $8 + 2 =$ _____

8 $8 + 9 =$ _____

9 $2 + 5 =$ _____

10 $9 + 5 =$ _____

11 $3 + 7 =$ _____

12 $1 + 9 =$ _____

13 $8 + 8 =$ _____

14 $5 + 7 =$ _____

15 $4 + 4 =$ _____

16 $3 + 6 =$ _____

17 $9 + 2 =$ _____

18 $6 + 9 =$ _____

19 $1 + 9 =$ _____

20 $7 + 6 =$ _____

21 $4 + 8 =$ _____

22 $5 + 0 =$ _____

23 $2 + 3 =$ _____

24 $9 + 7 =$ _____

25 $7 + 4 =$ _____

26 $6 + 7 =$ _____

27 $4 + 3 =$ _____

28 $2 + 6 =$ _____

29 $5 + 9 =$ _____

30 $3 + 8 =$ _____



Addition Facts—Repeated Reasoning

Find patterns with sums near 10.

1 $5 + 5 = \underline{\quad}$

2 $5 + 4 = \underline{\quad}$

3 $4 + 5 = \underline{\quad}$

4 $6 + 4 = \underline{\quad}$

5 $6 + 3 = \underline{\quad}$

6 $\underline{\quad} + 4 = 9$

7 $7 + 3 = \underline{\quad}$

8 $7 + \underline{\quad} = 9$

9 $6 + 3 = \underline{\quad}$

10 $8 + 2 = \underline{\quad}$

11 $8 + 1 = \underline{\quad}$

12 $7 + 2 = \underline{\quad}$

13 $9 + 1 = \underline{\quad}$

14 $9 + 0 = \underline{\quad}$

15 $\underline{\quad} + 1 = 9$

16 $5 + 5 = \underline{\quad}$

17 $5 + 6 = \underline{\quad}$

18 $6 + 5 = \underline{\quad}$

19 $4 + 6 = \underline{\quad}$

20 $4 + \underline{\quad} = 11$

21 $5 + 6 = \underline{\quad}$

22 $3 + 7 = \underline{\quad}$

23 $3 + 8 = \underline{\quad}$

24 $4 + 7 = \underline{\quad}$

25 $2 + 8 = \underline{\quad}$

26 $2 + 9 = \underline{\quad}$

27 $\underline{\quad} + 8 = 11$

28 $1 + 9 = \underline{\quad}$

29 $1 + \underline{\quad} = 11$

30 $2 + 9 = \underline{\quad}$

How does knowing that $5 + 5 = 10$ help you find $5 + 4$? How does it help you find $5 + 6$?

Addition Facts—Repeated Reasoning

Find patterns in adding 9.

- | | | | | | |
|----|------------------|----|------------------|----|------------------|
| 1 | $10 + 4 =$ _____ | 11 | $10 + 8 =$ _____ | 21 | $2 + 10 =$ _____ |
| 2 | $9 + 4 =$ _____ | 12 | $9 + 8 =$ _____ | 22 | $2 + 9 =$ _____ |
| 3 | $10 + 7 =$ _____ | 13 | $10 + 5 =$ _____ | 23 | $6 + 10 =$ _____ |
| 4 | $9 + 7 =$ _____ | 14 | $9 + 5 =$ _____ | 24 | $6 + 9 =$ _____ |
| 5 | $10 + 2 =$ _____ | 15 | $10 + 9 =$ _____ | 25 | $3 + 10 =$ _____ |
| 6 | $9 + 2 =$ _____ | 16 | $9 + 9 =$ _____ | 26 | $3 + 9 =$ _____ |
| 7 | $10 + 6 =$ _____ | 17 | $4 + 10 =$ _____ | 27 | $5 + 10 =$ _____ |
| 8 | $9 + 6 =$ _____ | 18 | $4 + 9 =$ _____ | 28 | $5 + 9 =$ _____ |
| 9 | $10 + 3 =$ _____ | 19 | $7 + 10 =$ _____ | 29 | $8 + 10 =$ _____ |
| 10 | $9 + 3 =$ _____ | 20 | $7 + 9 =$ _____ | 30 | $8 + 9 =$ _____ |

How does knowing that $5 + 10 = 15$ help you find $5 + 9$? How does knowing that $8 + 10 = 18$ help you find $8 + 9$?



Subtraction Facts—Skills Practice

Form A

Subtract within 10.

1 $3 - 1 =$ _____

2 $5 - 4 =$ _____

3 $9 - 5 =$ _____

4 $6 - 3 =$ _____

5 $10 - 4 =$ _____

6 $4 - 2 =$ _____

7 $7 - 0 =$ _____

8 $9 - 8 =$ _____

9 $8 - 3 =$ _____

10 $8 - 6 =$ _____

11 $10 - 5 =$ _____

12 $9 - 1 =$ _____

13 $7 - 2 =$ _____

14 $4 - 1 =$ _____

15 $7 - 5 =$ _____

16 $9 - 9 =$ _____

17 $6 - 5 =$ _____

18 $10 - 7 =$ _____

19 $9 - 4 =$ _____

20 $8 - 7 =$ _____

21 $5 - 3 =$ _____

22 $2 - 2 =$ _____

23 $7 - 4 =$ _____

24 $10 - 1 =$ _____

25 $4 - 3 =$ _____

26 $9 - 6 =$ _____

27 $10 - 9 =$ _____

28 $8 - 2 =$ _____

29 $6 - 4 =$ _____

30 $9 - 3 =$ _____

Subtraction Facts—Skills Practice

Subtract within 10.

Form B

1 $6 - 2 =$ _____

2 $10 - 2 =$ _____

3 $7 - 3 =$ _____

4 $7 - 6 =$ _____

5 $8 - 4 =$ _____

6 $4 - 4 =$ _____

7 $5 - 1 =$ _____

8 $9 - 7 =$ _____

9 $7 - 4 =$ _____

10 $8 - 5 =$ _____

11 $10 - 9 =$ _____

12 $8 - 2 =$ _____

13 $10 - 3 =$ _____

14 $2 - 1 =$ _____

15 $7 - 5 =$ _____

16 $1 - 0 =$ _____

17 $5 - 2 =$ _____

18 $9 - 6 =$ _____

19 $9 - 2 =$ _____

20 $8 - 7 =$ _____

21 $10 - 4 =$ _____

22 $8 - 1 =$ _____

23 $4 - 2 =$ _____

24 $6 - 4 =$ _____

25 $10 - 6 =$ _____

26 $9 - 3 =$ _____

27 $10 - 8 =$ _____

28 $7 - 5 =$ _____

29 $3 - 2 =$ _____

30 $9 - 5 =$ _____



Subtraction Facts—Skills Practice

Subtract from teen numbers.

Form A

1 $11 - 2 =$ _____

2 $14 - 7 =$ _____

3 $10 - 5 =$ _____

4 $13 - 8 =$ _____

5 $12 - 4 =$ _____

6 $11 - 9 =$ _____

7 $15 - 6 =$ _____

8 $11 - 5 =$ _____

9 $15 - 8 =$ _____

10 $12 - 3 =$ _____

11 $14 - 8 =$ _____

12 $12 - 7 =$ _____

13 $13 - 9 =$ _____

14 $11 - 4 =$ _____

15 $13 - 5 =$ _____

16 $16 - 7 =$ _____

17 $12 - 6 =$ _____

18 $14 - 9 =$ _____

19 $13 - 6 =$ _____

20 $18 - 9 =$ _____

21 $12 - 8 =$ _____

22 $15 - 9 =$ _____

23 $14 - 5 =$ _____

24 $17 - 9 =$ _____

25 $11 - 6 =$ _____

26 $12 - 9 =$ _____

27 $15 - 7 =$ _____

28 $14 - 9 =$ _____

29 $16 - 8 =$ _____

30 $12 - 5 =$ _____

Subtraction Facts—Skills Practice

Subtract from teen numbers.

Form B

- | | | | | | |
|----|------------------|----|------------------|----|------------------|
| 1 | $11 - 3 =$ _____ | 2 | $11 - 9 =$ _____ | 3 | $16 - 8 =$ _____ |
| 4 | $14 - 9 =$ _____ | 5 | $12 - 7 =$ _____ | 6 | $13 - 4 =$ _____ |
| 7 | $17 - 8 =$ _____ | 8 | $14 - 6 =$ _____ | 9 | $15 - 9 =$ _____ |
| 10 | $12 - 5 =$ _____ | 11 | $13 - 7 =$ _____ | 12 | $11 - 6 =$ _____ |
| 13 | $14 - 8 =$ _____ | 14 | $17 - 9 =$ _____ | 15 | $13 - 5 =$ _____ |
| 16 | $11 - 2 =$ _____ | 17 | $13 - 9 =$ _____ | 18 | $15 - 7 =$ _____ |
| 19 | $13 - 6 =$ _____ | 20 | $18 - 9 =$ _____ | 21 | $11 - 8 =$ _____ |
| 22 | $16 - 9 =$ _____ | 23 | $12 - 6 =$ _____ | 24 | $15 - 6 =$ _____ |
| 25 | $11 - 5 =$ _____ | 26 | $16 - 7 =$ _____ | 27 | $12 - 9 =$ _____ |
| 28 | $14 - 7 =$ _____ | 29 | $10 - 5 =$ _____ | 30 | $11 - 7 =$ _____ |



Subtraction Facts—Skills Practice

Subtract within 20.

Form A

1 $9 - 3 =$ _____

2 $12 - 5 =$ _____

3 $10 - 4 =$ _____

4 $14 - 9 =$ _____

5 $16 - 8 =$ _____

6 $11 - 9 =$ _____

7 $13 - 7 =$ _____

8 $12 - 3 =$ _____

9 $6 - 2 =$ _____

10 $8 - 4 =$ _____

11 $5 - 1 =$ _____

12 $10 - 5 =$ _____

13 $17 - 9 =$ _____

14 $10 - 8 =$ _____

15 $15 - 6 =$ _____

16 $9 - 6 =$ _____

17 $11 - 2 =$ _____

18 $14 - 8 =$ _____

19 $12 - 4 =$ _____

20 $10 - 7 =$ _____

21 $9 - 0 =$ _____

22 $13 - 9 =$ _____

23 $8 - 3 =$ _____

24 $11 - 6 =$ _____

25 $7 - 4 =$ _____

26 $15 - 8 =$ _____

27 $5 - 4 =$ _____

28 $7 - 7 =$ _____

29 $18 - 9 =$ _____

30 $8 - 6 =$ _____

Subtraction Facts—Skills Practice

Subtract within 20.

Form B

1 $11 - 3 =$ _____

2 $4 - 2 =$ _____

3 $12 - 8 =$ _____

4 $5 - 3 =$ _____

5 $15 - 7 =$ _____

6 $13 - 5 =$ _____

7 $9 - 4 =$ _____

8 $10 - 1 =$ _____

9 $16 - 9 =$ _____

10 $11 - 8 =$ _____

11 $8 - 5 =$ _____

12 $14 - 6 =$ _____

13 $4 - 4 =$ _____

14 $4 - 0 =$ _____

15 $12 - 7 =$ _____

16 $10 - 3 =$ _____

17 $13 - 6 =$ _____

18 $11 - 5 =$ _____

19 $17 - 8 =$ _____

20 $10 - 9 =$ _____

21 $7 - 3 =$ _____

22 $12 - 6 =$ _____

23 $6 - 3 =$ _____

24 $14 - 5 =$ _____

25 $7 - 5 =$ _____

26 $15 - 9 =$ _____

27 $10 - 6 =$ _____

28 $14 - 7 =$ _____

29 $9 - 5 =$ _____

30 $13 - 8 =$ _____



Subtraction Facts—Repeated Reasoning

Find patterns when you subtract from 9 or 11.

1 $10 - 1 =$ _____ 2 $9 - 1 =$ _____ 3 $11 - 1 =$ _____

4 $10 - 2 =$ _____ 5 $9 - 2 =$ _____ 6 $11 - 2 =$ _____

7 $10 - 3 =$ _____ 8 $9 - 3 =$ _____ 9 $11 - 3 =$ _____

10 $10 - 4 =$ _____ 11 $9 - 4 =$ _____ 12 $11 - 4 =$ _____

13 $10 - 5 =$ _____ 14 $9 - 5 =$ _____ 15 $11 - 5 =$ _____

16 $10 - 6 =$ _____ 17 $9 - 6 =$ _____ 18 $11 - 6 =$ _____

19 $10 - 7 =$ _____ 20 $9 - 7 =$ _____ 21 $11 - 7 =$ _____

22 $10 - 8 =$ _____ 23 $9 - 8 =$ _____ 24 $11 - 8 =$ _____

25 $10 - 9 =$ _____ 26 $9 - 9 =$ _____ 27 $11 - 9 =$ _____

How does knowing that $10 - 8 = 2$ help you find $9 - 8$? How does it help you find $11 - 8$?

Subtraction Facts—Repeated Reasoning

Find patterns with differences of 9.

- | | | | | | |
|----|--------------------------------------|----|--------------------------------------|----|-------------------------------------|
| 1 | $12 - 10 = \underline{\hspace{2cm}}$ | 11 | $17 - 10 = \underline{\hspace{2cm}}$ | 21 | $19 - 9 = \underline{\hspace{2cm}}$ |
| 2 | $12 - 9 = \underline{\hspace{2cm}}$ | 12 | $17 - 9 = \underline{\hspace{2cm}}$ | 22 | $18 - \underline{\hspace{2cm}} = 9$ |
| 3 | $15 - 10 = \underline{\hspace{2cm}}$ | 13 | $14 - 10 = \underline{\hspace{2cm}}$ | 23 | $15 - 5 = \underline{\hspace{2cm}}$ |
| 4 | $15 - 9 = \underline{\hspace{2cm}}$ | 14 | $14 - \underline{\hspace{2cm}} = 5$ | 24 | $14 - 5 = \underline{\hspace{2cm}}$ |
| 5 | $13 - 10 = \underline{\hspace{2cm}}$ | 15 | $12 - 2 = \underline{\hspace{2cm}}$ | 25 | $17 - 7 = \underline{\hspace{2cm}}$ |
| 6 | $13 - \underline{\hspace{2cm}} = 4$ | 16 | $11 - 2 = \underline{\hspace{2cm}}$ | 26 | $\underline{\hspace{2cm}} - 7 = 9$ |
| 7 | $18 - 10 = \underline{\hspace{2cm}}$ | 17 | $13 - 3 = \underline{\hspace{2cm}}$ | 27 | $14 - 4 = \underline{\hspace{2cm}}$ |
| 8 | $18 - 9 = \underline{\hspace{2cm}}$ | 18 | $\underline{\hspace{2cm}} - 3 = 9$ | 28 | $13 - 4 = \underline{\hspace{2cm}}$ |
| 9 | $11 - 10 = \underline{\hspace{2cm}}$ | 19 | $16 - 6 = \underline{\hspace{2cm}}$ | 29 | $18 - 8 = \underline{\hspace{2cm}}$ |
| 10 | $\underline{\hspace{2cm}} - 9 = 2$ | 20 | $15 - 6 = \underline{\hspace{2cm}}$ | 30 | $17 - \underline{\hspace{2cm}} = 9$ |

How does knowing that $12 - 10 = 2$ help you find $12 - 9$? How does knowing that $15 - 10 = 5$ help you find $15 - 9$?



Add a 2-digit and a 1-digit number.

Form A

$$\begin{array}{r} 1 \quad 25 \\ + 3 \\ \hline \end{array}$$

$$\begin{array}{r} 2 \quad 18 \\ + 8 \\ \hline \end{array}$$

$$\begin{array}{r} 3 \quad 55 \\ + 5 \\ \hline \end{array}$$

$$\begin{array}{r} 4 \quad 81 \\ + 6 \\ \hline \end{array}$$

$$\begin{array}{r} 5 \quad 54 \\ + 9 \\ \hline \end{array}$$

$$\begin{array}{r} 6 \quad 23 \\ + 7 \\ \hline \end{array}$$

$$\begin{array}{r} 7 \quad 43 \\ + 8 \\ \hline \end{array}$$

$$\begin{array}{r} 8 \quad 20 \\ + 9 \\ \hline \end{array}$$

$$\begin{array}{r} 9 \quad 64 \\ + 4 \\ \hline \end{array}$$

$$\begin{array}{r} 10 \quad 19 \\ + 8 \\ \hline \end{array}$$

$$\begin{array}{r} 11 \quad 92 \\ + 7 \\ \hline \end{array}$$

$$\begin{array}{r} 12 \quad 62 \\ + 9 \\ \hline \end{array}$$

$$\begin{array}{r} 13 \quad 35 \\ + 6 \\ \hline \end{array}$$

$$\begin{array}{r} 14 \quad 72 \\ + 9 \\ \hline \end{array}$$

$$\begin{array}{r} 15 \quad 46 \\ + 3 \\ \hline \end{array}$$

$$\begin{array}{r} 16 \quad 73 \\ + 7 \\ \hline \end{array}$$

$$\begin{array}{r} 17 \quad 88 \\ + 8 \\ \hline \end{array}$$

$$\begin{array}{r} 18 \quad 65 \\ + 7 \\ \hline \end{array}$$

$$\begin{array}{r} 19 \quad 22 \\ + 4 \\ \hline \end{array}$$

$$\begin{array}{r} 20 \quad 48 \\ + 5 \\ \hline \end{array}$$

Add a 2-digit and a 1-digit number.

Form B

$$\begin{array}{r} 12 \\ + 5 \\ \hline \end{array}$$

$$\begin{array}{r} 58 \\ + 4 \\ \hline \end{array}$$

$$\begin{array}{r} 29 \\ + 6 \\ \hline \end{array}$$

$$\begin{array}{r} 84 \\ + 2 \\ \hline \end{array}$$

$$\begin{array}{r} 67 \\ + 3 \\ \hline \end{array}$$

$$\begin{array}{r} 34 \\ + 7 \\ \hline \end{array}$$

$$\begin{array}{r} 91 \\ + 8 \\ \hline \end{array}$$

$$\begin{array}{r} 23 \\ + 3 \\ \hline \end{array}$$

$$\begin{array}{r} 75 \\ + 8 \\ \hline \end{array}$$

$$\begin{array}{r} 42 \\ + 3 \\ \hline \end{array}$$

$$\begin{array}{r} 59 \\ + 9 \\ \hline \end{array}$$

$$\begin{array}{r} 32 \\ + 6 \\ \hline \end{array}$$

$$\begin{array}{r} 29 \\ + 3 \\ \hline \end{array}$$

$$\begin{array}{r} 87 \\ + 7 \\ \hline \end{array}$$

$$\begin{array}{r} 44 \\ + 6 \\ \hline \end{array}$$

$$\begin{array}{r} 53 \\ + 5 \\ \hline \end{array}$$

$$\begin{array}{r} 18 \\ + 9 \\ \hline \end{array}$$

$$\begin{array}{r} 62 \\ + 8 \\ \hline \end{array}$$

$$\begin{array}{r} 79 \\ + 7 \\ \hline \end{array}$$

$$\begin{array}{r} 33 \\ + 9 \\ \hline \end{array}$$



Add 2-digit numbers.

Form A

$$\begin{array}{r} \mathbf{1} \quad 14 \\ + 14 \\ \hline \end{array}$$

$$\begin{array}{r} \mathbf{2} \quad 38 \\ + 17 \\ \hline \end{array}$$

$$\begin{array}{r} \mathbf{3} \quad 43 \\ + 39 \\ \hline \end{array}$$

$$\begin{array}{r} \mathbf{4} \quad 25 \\ + 32 \\ \hline \end{array}$$

$$\begin{array}{r} \mathbf{5} \quad 27 \\ + 23 \\ \hline \end{array}$$

$$\begin{array}{r} \mathbf{6} \quad 49 \\ + 46 \\ \hline \end{array}$$

$$\begin{array}{r} \mathbf{7} \quad 23 \\ + 65 \\ \hline \end{array}$$

$$\begin{array}{r} \mathbf{8} \quad 74 \\ + 18 \\ \hline \end{array}$$

$$\begin{array}{r} \mathbf{9} \quad 36 \\ + 34 \\ \hline \end{array}$$

$$\begin{array}{r} \mathbf{10} \quad 13 \\ + 18 \\ \hline \end{array}$$

$$\begin{array}{r} \mathbf{11} \quad 72 \\ + 27 \\ \hline \end{array}$$

$$\begin{array}{r} \mathbf{12} \quad 36 \\ + 28 \\ \hline \end{array}$$

$$\begin{array}{r} \mathbf{13} \quad 40 \\ + 19 \\ \hline \end{array}$$

$$\begin{array}{r} \mathbf{14} \quad 58 \\ + 23 \\ \hline \end{array}$$

$$\begin{array}{r} \mathbf{15} \quad 65 \\ + 16 \\ \hline \end{array}$$

$$\begin{array}{r} \mathbf{16} \quad 44 \\ + 33 \\ \hline \end{array}$$

$$\begin{array}{r} \mathbf{17} \quad 25 \\ + 31 \\ \hline \end{array}$$

$$\begin{array}{r} \mathbf{18} \quad 49 \\ + 49 \\ \hline \end{array}$$

$$\begin{array}{r} \mathbf{19} \quad 11 \\ + 18 \\ \hline \end{array}$$

$$\begin{array}{r} \mathbf{20} \quad 38 \\ + 45 \\ \hline \end{array}$$

Add 2-digit numbers.

Form B

$$\begin{array}{r} 1 \quad 22 \\ + 15 \\ \hline \end{array}$$

$$\begin{array}{r} 2 \quad 43 \\ + 19 \\ \hline \end{array}$$

$$\begin{array}{r} 3 \quad 36 \\ + 32 \\ \hline \end{array}$$

$$\begin{array}{r} 4 \quad 48 \\ + 48 \\ \hline \end{array}$$

$$\begin{array}{r} 5 \quad 17 \\ + 56 \\ \hline \end{array}$$

$$\begin{array}{r} 6 \quad 25 \\ + 55 \\ \hline \end{array}$$

$$\begin{array}{r} 7 \quad 33 \\ + 24 \\ \hline \end{array}$$

$$\begin{array}{r} 8 \quad 71 \\ + 19 \\ \hline \end{array}$$

$$\begin{array}{r} 9 \quad 63 \\ + 36 \\ \hline \end{array}$$

$$\begin{array}{r} 10 \quad 12 \\ + 34 \\ \hline \end{array}$$

$$\begin{array}{r} 11 \quad 20 \\ + 28 \\ \hline \end{array}$$

$$\begin{array}{r} 12 \quad 39 \\ + 17 \\ \hline \end{array}$$

$$\begin{array}{r} 13 \quad 25 \\ + 38 \\ \hline \end{array}$$

$$\begin{array}{r} 14 \quad 58 \\ + 29 \\ \hline \end{array}$$

$$\begin{array}{r} 15 \quad 45 \\ + 23 \\ \hline \end{array}$$

$$\begin{array}{r} 16 \quad 34 \\ + 56 \\ \hline \end{array}$$

$$\begin{array}{r} 17 \quad 69 \\ + 24 \\ \hline \end{array}$$

$$\begin{array}{r} 18 \quad 22 \\ + 66 \\ \hline \end{array}$$

$$\begin{array}{r} 19 \quad 73 \\ + 12 \\ \hline \end{array}$$

$$\begin{array}{r} 20 \quad 35 \\ + 37 \\ \hline \end{array}$$



Find regrouping patterns.

1 $7 + 3 =$ _____

2 $7 + 4 =$ _____

3 $7 + 5 =$ _____

4 $17 + 3 =$ _____

5 $17 + 4 =$ _____

6 $17 + 5 =$ _____

7 $27 + 3 =$ _____

8 $27 + 4 =$ _____

9 $27 + 5 =$ _____

10 $8 + 2 =$ _____

11 $8 + 3 =$ _____

12 $8 + 4 =$ _____

13 $18 + 2 =$ _____

14 $18 + 3 =$ _____

15 $18 + 4 =$ _____

16 $28 + 2 =$ _____

17 $28 + 3 =$ _____

18 $28 + 4 =$ _____

19 $6 + 4 =$ _____

20 $6 + 5 =$ _____

21 $6 + 6 =$ _____

22 $16 + 4 =$ _____

23 $16 + 5 =$ _____

24 $16 + 6 =$ _____

25 $26 + 4 =$ _____

26 $26 + 5 =$ _____

27 $26 + 6 =$ _____

Look at Problems 1 to 9. How does knowing that $7 + 3 = 10$ help you find $7 + 5$? How does knowing that $7 + 3 = 10$ help you find $27 + 5$?

Find more regrouping patterns.

1 $30 + 1 + 40 + 9 =$ _____

2 $31 + 49 =$ _____

3 $30 + 2 + 40 + 8 =$ _____

4 $32 + 48 =$ _____

5 $30 + 3 + 40 + 7 =$ _____

6 $33 + 47 =$ _____

7 $20 + 4 + 30 + 6 =$ _____

8 $24 + 36 =$ _____

9 $20 + 5 + 30 + 5 =$ _____

10 $25 +$ _____ $= 60$

11 $20 + 6 + 30 + 4 =$ _____

12 _____ $+ 34 = 60$

13 $40 + 7 + 20 + 3 =$ _____

14 $47 + 23 =$ _____

15 $40 + 8 + 20 + 2 =$ _____

16 _____ $+ 22 = 70$

17 $40 + 9 + 20 + 1 =$ _____

18 $49 +$ _____ $= 70$

Look at Problems 7 and 8. How can knowing that $4 + 6 = 10$ help you find $24 + 36$?



Subtraction Within 100—Skills Practice

Name: _____

Subtract a 1-digit number from a 2-digit number.

Form A

$$\begin{array}{r} 1 \quad 49 \\ - 3 \\ \hline \end{array}$$

$$\begin{array}{r} 2 \quad 25 \\ - 7 \\ \hline \end{array}$$

$$\begin{array}{r} 3 \quad 56 \\ - 2 \\ \hline \end{array}$$

$$\begin{array}{r} 4 \quad 38 \\ - 9 \\ \hline \end{array}$$

$$\begin{array}{r} 5 \quad 88 \\ - 4 \\ \hline \end{array}$$

$$\begin{array}{r} 6 \quad 67 \\ - 6 \\ \hline \end{array}$$

$$\begin{array}{r} 7 \quad 41 \\ - 6 \\ \hline \end{array}$$

$$\begin{array}{r} 8 \quad 90 \\ - 8 \\ \hline \end{array}$$

$$\begin{array}{r} 9 \quad 73 \\ - 7 \\ \hline \end{array}$$

$$\begin{array}{r} 10 \quad 94 \\ - 3 \\ \hline \end{array}$$

$$\begin{array}{r} 11 \quad 86 \\ - 9 \\ \hline \end{array}$$

$$\begin{array}{r} 12 \quad 31 \\ - 1 \\ \hline \end{array}$$

$$\begin{array}{r} 13 \quad 52 \\ - 3 \\ \hline \end{array}$$

$$\begin{array}{r} 14 \quad 34 \\ - 5 \\ \hline \end{array}$$

$$\begin{array}{r} 15 \quad 27 \\ - 4 \\ \hline \end{array}$$

$$\begin{array}{r} 16 \quad 85 \\ - 3 \\ \hline \end{array}$$

$$\begin{array}{r} 17 \quad 99 \\ - 7 \\ \hline \end{array}$$

$$\begin{array}{r} 18 \quad 70 \\ - 4 \\ \hline \end{array}$$

$$\begin{array}{r} 19 \quad 48 \\ - 6 \\ \hline \end{array}$$

$$\begin{array}{r} 20 \quad 65 \\ - 8 \\ \hline \end{array}$$

Subtraction Within 100—Skills Practice

Name: _____

Subtract a 1-digit number from a 2-digit number.

Form B

$$\begin{array}{r} 17 \\ - 2 \\ \hline \end{array}$$

$$\begin{array}{r} 36 \\ - 5 \\ \hline \end{array}$$

$$\begin{array}{r} 24 \\ - 8 \\ \hline \end{array}$$

$$\begin{array}{r} 59 \\ - 7 \\ \hline \end{array}$$

$$\begin{array}{r} 45 \\ - 6 \\ \hline \end{array}$$

$$\begin{array}{r} 51 \\ - 3 \\ \hline \end{array}$$

$$\begin{array}{r} 78 \\ - 6 \\ \hline \end{array}$$

$$\begin{array}{r} 93 \\ - 8 \\ \hline \end{array}$$

$$\begin{array}{r} 68 \\ - 8 \\ \hline \end{array}$$

$$\begin{array}{r} 37 \\ - 9 \\ \hline \end{array}$$

$$\begin{array}{r} 25 \\ - 2 \\ \hline \end{array}$$

$$\begin{array}{r} 40 \\ - 6 \\ \hline \end{array}$$

$$\begin{array}{r} 93 \\ - 3 \\ \hline \end{array}$$

$$\begin{array}{r} 89 \\ - 6 \\ \hline \end{array}$$

$$\begin{array}{r} 62 \\ - 5 \\ \hline \end{array}$$

$$\begin{array}{r} 77 \\ - 5 \\ \hline \end{array}$$

$$\begin{array}{r} 80 \\ - 7 \\ \hline \end{array}$$

$$\begin{array}{r} 76 \\ - 8 \\ \hline \end{array}$$

$$\begin{array}{r} 49 \\ - 5 \\ \hline \end{array}$$

$$\begin{array}{r} 81 \\ - 8 \\ \hline \end{array}$$



Subtraction Within 100—Skills Practice

Name: _____

Subtract 2-digit numbers.

Form A

$$\begin{array}{r} 1 \quad 34 \\ - 12 \\ \hline \end{array}$$

$$\begin{array}{r} 2 \quad 75 \\ - 25 \\ \hline \end{array}$$

$$\begin{array}{r} 3 \quad 42 \\ - 18 \\ \hline \end{array}$$

$$\begin{array}{r} 4 \quad 67 \\ - 37 \\ \hline \end{array}$$

$$\begin{array}{r} 5 \quad 85 \\ - 26 \\ \hline \end{array}$$

$$\begin{array}{r} 6 \quad 51 \\ - 15 \\ \hline \end{array}$$

$$\begin{array}{r} 7 \quad 93 \\ - 72 \\ \hline \end{array}$$

$$\begin{array}{r} 8 \quad 96 \\ - 48 \\ \hline \end{array}$$

$$\begin{array}{r} 9 \quad 78 \\ - 20 \\ \hline \end{array}$$

$$\begin{array}{r} 10 \quad 63 \\ - 39 \\ \hline \end{array}$$

$$\begin{array}{r} 11 \quad 28 \\ - 14 \\ \hline \end{array}$$

$$\begin{array}{r} 12 \quad 34 \\ - 25 \\ \hline \end{array}$$

$$\begin{array}{r} 13 \quad 59 \\ - 48 \\ \hline \end{array}$$

$$\begin{array}{r} 14 \quad 86 \\ - 82 \\ \hline \end{array}$$

$$\begin{array}{r} 15 \quad 77 \\ - 28 \\ \hline \end{array}$$

$$\begin{array}{r} 16 \quad 33 \\ - 21 \\ \hline \end{array}$$

$$\begin{array}{r} 17 \quad 36 \\ - 19 \\ \hline \end{array}$$

$$\begin{array}{r} 18 \quad 95 \\ - 67 \\ \hline \end{array}$$

$$\begin{array}{r} 19 \quad 87 \\ - 44 \\ \hline \end{array}$$

$$\begin{array}{r} 20 \quad 58 \\ - 39 \\ \hline \end{array}$$

Subtraction Within 100—Skills Practice

Name: _____

Subtract 2-digit numbers.

Form B

$$\begin{array}{r} 1 \quad 37 \\ - 26 \\ \hline \end{array}$$

$$\begin{array}{r} 2 \quad 68 \\ - 41 \\ \hline \end{array}$$

$$\begin{array}{r} 3 \quad 53 \\ - 27 \\ \hline \end{array}$$

$$\begin{array}{r} 4 \quad 45 \\ - 15 \\ \hline \end{array}$$

$$\begin{array}{r} 5 \quad 76 \\ - 38 \\ \hline \end{array}$$

$$\begin{array}{r} 6 \quad 80 \\ - 47 \\ \hline \end{array}$$

$$\begin{array}{r} 7 \quad 94 \\ - 72 \\ \hline \end{array}$$

$$\begin{array}{r} 8 \quad 32 \\ - 17 \\ \hline \end{array}$$

$$\begin{array}{r} 9 \quad 99 \\ - 14 \\ \hline \end{array}$$

$$\begin{array}{r} 10 \quad 24 \\ - 15 \\ \hline \end{array}$$

$$\begin{array}{r} 11 \quad 87 \\ - 40 \\ \hline \end{array}$$

$$\begin{array}{r} 12 \quad 63 \\ - 28 \\ \hline \end{array}$$

$$\begin{array}{r} 13 \quad 53 \\ - 21 \\ \hline \end{array}$$

$$\begin{array}{r} 14 \quad 76 \\ - 33 \\ \hline \end{array}$$

$$\begin{array}{r} 15 \quad 95 \\ - 39 \\ \hline \end{array}$$

$$\begin{array}{r} 16 \quad 56 \\ - 42 \\ \hline \end{array}$$

$$\begin{array}{r} 17 \quad 86 \\ - 57 \\ \hline \end{array}$$

$$\begin{array}{r} 18 \quad 62 \\ - 24 \\ \hline \end{array}$$

$$\begin{array}{r} 19 \quad 48 \\ - 32 \\ \hline \end{array}$$

$$\begin{array}{r} 20 \quad 71 \\ - 43 \\ \hline \end{array}$$



Subtraction Within 100— Repeated Reasoning

Name: _____

Find place value patterns.

1 $83 - 0 =$ _____ **2** $83 - 10 =$ _____ **3** $83 - 20 =$ _____

4 $83 - 1 =$ _____ **5** $83 - 11 =$ _____ **6** $83 - 21 =$ _____

7 $83 - 2 =$ _____ **8** $83 - 12 =$ _____ **9** $83 - 22 =$ _____

10 $83 - 3 =$ _____ **11** $83 - 13 =$ _____ **12** $83 - 23 =$ _____

13 $83 - 4 =$ _____ **14** $83 - 14 =$ _____ **15** $83 - 24 =$ _____

16 $83 - 5 =$ _____ **17** $83 - 15 =$ _____ **18** $83 - 25 =$ _____

19 $73 - 5 =$ _____ **20** $73 - 15 =$ _____ **21** $73 - 25 =$ _____

22 $63 - 5 =$ _____ **23** $63 - 15 =$ _____ **24** $63 - 25 =$ _____

25 $53 - 5 =$ _____ **26** $53 - 15 =$ _____ **27** $53 - 25 =$ _____

Look at Problems 25, 26, and 27. What is the same about the answers? What is different? How does knowing $53 - 25$ help you find $53 - 35$?

Subtraction Within 100— Repeated Reasoning

Name: _____

Find patterns with problems that have the same answer.

1 $100 - 10 =$ _____

11 $100 - 30 =$ _____

2 $100 - 10 - 1 =$ _____

12 $100 - 30 - 3 =$ _____

3 $100 - 11 =$ _____

13 $100 - 33 =$ _____

4 $100 - 10 - 2 =$ _____

14 $100 - 30 - 4 =$ _____

5 $100 - 12 =$ _____

15 $100 - 34 =$ _____

6 $100 - 20 =$ _____

16 $100 - 40 =$ _____

7 $100 - 20 - 1 =$ _____

17 $100 - 40 - 3 =$ _____

8 $100 - 21 =$ _____

18 $100 - 43 =$ _____

9 $100 - 20 - 2 =$ _____

19 $100 - 40 - 4 =$ _____

10 $100 - 22 =$ _____

20 $100 - 44 =$ _____

How does solving $100 - 40 - 3$ help you find $100 - 43$?



Addition and Subtraction Within 100— Skills Practice

Name: _____

Add or subtract.

Form A

1 $4 + 4 =$ _____

2 $8 + 2 =$ _____

3 $5 + 7 =$ _____

4 $9 - 3 =$ _____

5 $17 - 8 =$ _____

6 $10 - 6 =$ _____

7
$$\begin{array}{r} 21 \\ + 8 \\ \hline \end{array}$$

8
$$\begin{array}{r} 37 \\ + 3 \\ \hline \end{array}$$

9
$$\begin{array}{r} 84 \\ + 9 \\ \hline \end{array}$$

10
$$\begin{array}{r} 72 \\ + 5 \\ \hline \end{array}$$

11
$$\begin{array}{r} 45 \\ - 6 \\ \hline \end{array}$$

12
$$\begin{array}{r} 58 \\ - 2 \\ \hline \end{array}$$

13
$$\begin{array}{r} 98 \\ - 3 \\ \hline \end{array}$$

14
$$\begin{array}{r} 61 \\ - 8 \\ \hline \end{array}$$

15
$$\begin{array}{r} 12 \\ + 32 \\ \hline \end{array}$$

16
$$\begin{array}{r} 39 \\ + 51 \\ \hline \end{array}$$

17
$$\begin{array}{r} 26 \\ + 33 \\ \hline \end{array}$$

18
$$\begin{array}{r} 57 \\ + 27 \\ \hline \end{array}$$

19
$$\begin{array}{r} 83 \\ - 38 \\ \hline \end{array}$$

20
$$\begin{array}{r} 74 \\ - 70 \\ \hline \end{array}$$

21
$$\begin{array}{r} 52 \\ - 35 \\ \hline \end{array}$$

22
$$\begin{array}{r} 49 \\ - 18 \\ \hline \end{array}$$

Addition and Subtraction Within 100— Skills Practice

Name: _____

Add or subtract.

Form B

1 $6 + 3 =$ _____

2 $7 + 7 =$ _____

3 $9 + 8 =$ _____

4 $5 - 4 =$ _____

5 $13 - 9 =$ _____

6 $16 - 8 =$ _____

7
$$\begin{array}{r} 45 \\ + 6 \\ \hline \end{array}$$

8
$$\begin{array}{r} 23 \\ + 4 \\ \hline \end{array}$$

9
$$\begin{array}{r} 74 \\ + 5 \\ \hline \end{array}$$

10
$$\begin{array}{r} 59 \\ + 3 \\ \hline \end{array}$$

11
$$\begin{array}{r} 87 \\ - 3 \\ \hline \end{array}$$

12
$$\begin{array}{r} 62 \\ - 6 \\ \hline \end{array}$$

13
$$\begin{array}{r} 56 \\ - 5 \\ \hline \end{array}$$

14
$$\begin{array}{r} 94 \\ - 8 \\ \hline \end{array}$$

15
$$\begin{array}{r} 36 \\ + 60 \\ \hline \end{array}$$

16
$$\begin{array}{r} 29 \\ + 39 \\ \hline \end{array}$$

17
$$\begin{array}{r} 43 \\ + 32 \\ \hline \end{array}$$

18
$$\begin{array}{r} 67 \\ + 24 \\ \hline \end{array}$$

19
$$\begin{array}{r} 92 \\ - 53 \\ \hline \end{array}$$

20
$$\begin{array}{r} 78 \\ - 25 \\ \hline \end{array}$$

21
$$\begin{array}{r} 81 \\ - 64 \\ \hline \end{array}$$

22
$$\begin{array}{r} 97 \\ - 18 \\ \hline \end{array}$$



Addition and Subtraction Within 1,000— Skills Practice

Name: _____

Add and subtract 10 and 100.

Form A

1 $24 + 10 =$ _____ 2 $375 + 100 =$ _____ 3 $580 + 10 =$ _____

4 $77 - 10 =$ _____ 5 $238 - 100 =$ _____ 6 $462 - 10 =$ _____

7 $44 + 10 =$ _____ 8 $727 + 100 =$ _____ 9 $703 + 10 =$ _____

10 $86 - 10 =$ _____ 11 $446 - 100 =$ _____ 12 $112 - 10 =$ _____

13 $59 + 10 =$ _____ 14 $500 + 100 =$ _____ 15 $633 + 10 =$ _____

16 $73 - 10 =$ _____ 17 $874 - 100 =$ _____ 18 $808 - 10 =$ _____

19 $15 + 10 =$ _____ 20 $702 + 100 =$ _____ 21 $451 + 10 =$ _____

22 $90 - 10 =$ _____ 23 $357 - 100 =$ _____ 24 $234 - 10 =$ _____

25 $61 + 10 =$ _____ 26 $555 + 100 =$ _____ 27 $290 + 10 =$ _____

28 $32 - 10 =$ _____ 29 $692 - 100 =$ _____ 30 $989 - 10 =$ _____

Addition and Subtraction Within 1,000— Skills Practice

Name: _____

Add and subtract 10 and 100.

Form B

1 $37 + 10 =$ _____ 2 $548 + 100 =$ _____ 3 $472 + 10 =$ _____

4 $64 - 10 =$ _____ 5 $841 - 100 =$ _____ 6 $115 - 10 =$ _____

7 $85 + 10 =$ _____ 8 $597 + 100 =$ _____ 9 $712 + 10 =$ _____

10 $33 - 10 =$ _____ 11 $608 - 100 =$ _____ 12 $529 - 10 =$ _____

13 $70 + 10 =$ _____ 14 $466 + 100 =$ _____ 15 $903 + 10 =$ _____

16 $98 - 10 =$ _____ 17 $230 - 100 =$ _____ 18 $681 - 10 =$ _____

19 $56 + 10 =$ _____ 20 $556 + 100 =$ _____ 21 $199 + 10 =$ _____

22 $89 - 10 =$ _____ 23 $303 - 100 =$ _____ 24 $548 - 10 =$ _____

25 $41 + 10 =$ _____ 26 $895 + 100 =$ _____ 27 $890 + 10 =$ _____

28 $72 - 10 =$ _____ 29 $771 - 100 =$ _____ 30 $292 - 10 =$ _____



Addition and Subtraction Within 1,000— Skills Practice

Name: _____

Find sums up to 1,000.

Form A

$$\begin{array}{r} 1 \quad 213 \\ + 462 \\ \hline \end{array}$$

$$\begin{array}{r} 2 \quad 129 \\ + 625 \\ \hline \end{array}$$

$$\begin{array}{r} 3 \quad 465 \\ + 173 \\ \hline \end{array}$$

$$\begin{array}{r} 4 \quad 257 \\ + 584 \\ \hline \end{array}$$

$$\begin{array}{r} 5 \quad 379 \\ + 381 \\ \hline \end{array}$$

$$\begin{array}{r} 6 \quad 163 \\ + 507 \\ \hline \end{array}$$

$$\begin{array}{r} 7 \quad 228 \\ + 334 \\ \hline \end{array}$$

$$\begin{array}{r} 8 \quad 148 \\ + 775 \\ \hline \end{array}$$

$$\begin{array}{r} 9 \quad 543 \\ + 321 \\ \hline \end{array}$$

$$\begin{array}{r} 10 \quad 427 \\ + 273 \\ \hline \end{array}$$

$$\begin{array}{r} 11 \quad 284 \\ + 284 \\ \hline \end{array}$$

$$\begin{array}{r} 12 \quad 530 \\ + 292 \\ \hline \end{array}$$

$$\begin{array}{r} 13 \quad 354 \\ + 119 \\ \hline \end{array}$$

$$\begin{array}{r} 14 \quad 172 \\ + 682 \\ \hline \end{array}$$

$$\begin{array}{r} 15 \quad 393 \\ + 105 \\ \hline \end{array}$$

$$\begin{array}{r} 16 \quad 297 \\ + 569 \\ \hline \end{array}$$

$$\begin{array}{r} 17 \quad 237 \\ + 557 \\ \hline \end{array}$$

$$\begin{array}{r} 18 \quad 421 \\ + 124 \\ \hline \end{array}$$

$$\begin{array}{r} 19 \quad 389 \\ + 538 \\ \hline \end{array}$$

$$\begin{array}{r} 20 \quad 654 \\ + 156 \\ \hline \end{array}$$

Addition and Subtraction Within 1,000— Skills Practice

Name: _____

Find sums up to 1,000.

Form B

$$\begin{array}{r} 1 \quad 614 \\ + 182 \\ \hline \end{array}$$

$$\begin{array}{r} 2 \quad 227 \\ + 325 \\ \hline \end{array}$$

$$\begin{array}{r} 3 \quad 191 \\ + 494 \\ \hline \end{array}$$

$$\begin{array}{r} 4 \quad 268 \\ + 357 \\ \hline \end{array}$$

$$\begin{array}{r} 5 \quad 123 \\ + 321 \\ \hline \end{array}$$

$$\begin{array}{r} 6 \quad 364 \\ + 279 \\ \hline \end{array}$$

$$\begin{array}{r} 7 \quad 242 \\ + 575 \\ \hline \end{array}$$

$$\begin{array}{r} 8 \quad 485 \\ + 241 \\ \hline \end{array}$$

$$\begin{array}{r} 9 \quad 587 \\ + 337 \\ \hline \end{array}$$

$$\begin{array}{r} 10 \quad 328 \\ + 612 \\ \hline \end{array}$$

$$\begin{array}{r} 11 \quad 649 \\ + 139 \\ \hline \end{array}$$

$$\begin{array}{r} 12 \quad 348 \\ + 384 \\ \hline \end{array}$$

$$\begin{array}{r} 13 \quad 428 \\ + 225 \\ \hline \end{array}$$

$$\begin{array}{r} 14 \quad 824 \\ + 142 \\ \hline \end{array}$$

$$\begin{array}{r} 15 \quad 375 \\ + 579 \\ \hline \end{array}$$

$$\begin{array}{r} 16 \quad 472 \\ + 336 \\ \hline \end{array}$$

$$\begin{array}{r} 17 \quad 152 \\ + 183 \\ \hline \end{array}$$

$$\begin{array}{r} 18 \quad 327 \\ + 237 \\ \hline \end{array}$$

$$\begin{array}{r} 19 \quad 341 \\ + 341 \\ \hline \end{array}$$

$$\begin{array}{r} 20 \quad 257 \\ + 696 \\ \hline \end{array}$$



Addition and Subtraction Within 1,000— Skills Practice

Name: _____

Subtract from 3-digit numbers.

Form A

$$\begin{array}{r} 1 \quad 843 \\ - 721 \\ \hline \end{array}$$

$$\begin{array}{r} 2 \quad 556 \\ - 229 \\ \hline \end{array}$$

$$\begin{array}{r} 3 \quad 659 \\ - 484 \\ \hline \end{array}$$

$$\begin{array}{r} 4 \quad 932 \\ - 346 \\ \hline \end{array}$$

$$\begin{array}{r} 5 \quad 480 \\ - 326 \\ \hline \end{array}$$

$$\begin{array}{r} 6 \quad 851 \\ - 548 \\ \hline \end{array}$$

$$\begin{array}{r} 7 \quad 941 \\ - 184 \\ \hline \end{array}$$

$$\begin{array}{r} 8 \quad 868 \\ - 787 \\ \hline \end{array}$$

$$\begin{array}{r} 9 \quad 982 \\ - 561 \\ \hline \end{array}$$

$$\begin{array}{r} 10 \quad 600 \\ - 312 \\ \hline \end{array}$$

$$\begin{array}{r} 11 \quad 835 \\ - 232 \\ \hline \end{array}$$

$$\begin{array}{r} 12 \quad 765 \\ - 275 \\ \hline \end{array}$$

$$\begin{array}{r} 13 \quad 517 \\ - 158 \\ \hline \end{array}$$

$$\begin{array}{r} 14 \quad 835 \\ - 232 \\ \hline \end{array}$$

$$\begin{array}{r} 15 \quad 363 \\ - 289 \\ \hline \end{array}$$

$$\begin{array}{r} 16 \quad 935 \\ - 617 \\ \hline \end{array}$$

$$\begin{array}{r} 17 \quad 748 \\ - 272 \\ \hline \end{array}$$

$$\begin{array}{r} 18 \quad 616 \\ - 414 \\ \hline \end{array}$$

$$\begin{array}{r} 19 \quad 528 \\ - 174 \\ \hline \end{array}$$

$$\begin{array}{r} 20 \quad 957 \\ - 379 \\ \hline \end{array}$$

Addition and Subtraction Within 1,000— Skills Practice

Name: _____

Subtract from 3-digit numbers.

Form B

$$\begin{array}{r} 1 \quad 595 \\ - 383 \\ \hline \end{array}$$

$$\begin{array}{r} 2 \quad 726 \\ - 154 \\ \hline \end{array}$$

$$\begin{array}{r} 3 \quad 644 \\ - 119 \\ \hline \end{array}$$

$$\begin{array}{r} 4 \quad 872 \\ - 694 \\ \hline \end{array}$$

$$\begin{array}{r} 5 \quad 430 \\ - 143 \\ \hline \end{array}$$

$$\begin{array}{r} 6 \quad 956 \\ - 927 \\ \hline \end{array}$$

$$\begin{array}{r} 7 \quad 988 \\ - 296 \\ \hline \end{array}$$

$$\begin{array}{r} 8 \quad 349 \\ - 187 \\ \hline \end{array}$$

$$\begin{array}{r} 9 \quad 873 \\ - 367 \\ \hline \end{array}$$

$$\begin{array}{r} 10 \quad 642 \\ - 231 \\ \hline \end{array}$$

$$\begin{array}{r} 11 \quad 516 \\ - 238 \\ \hline \end{array}$$

$$\begin{array}{r} 12 \quad 825 \\ - 568 \\ \hline \end{array}$$

$$\begin{array}{r} 13 \quad 986 \\ - 655 \\ \hline \end{array}$$

$$\begin{array}{r} 14 \quad 822 \\ - 288 \\ \hline \end{array}$$

$$\begin{array}{r} 15 \quad 740 \\ - 319 \\ \hline \end{array}$$

$$\begin{array}{r} 16 \quad 434 \\ - 373 \\ \hline \end{array}$$

$$\begin{array}{r} 17 \quad 605 \\ - 183 \\ \hline \end{array}$$

$$\begin{array}{r} 18 \quad 597 \\ - 355 \\ \hline \end{array}$$

$$\begin{array}{r} 19 \quad 962 \\ - 437 \\ \hline \end{array}$$

$$\begin{array}{r} 20 \quad 784 \\ - 295 \\ \hline \end{array}$$



Addition and Subtraction Within 1,000— Skills Practice

Name: _____

Add several 2-digit numbers.

Form A

$$\begin{array}{r} 1 \quad 14 \\ \quad 37 \\ + 16 \\ \hline \end{array}$$

$$\begin{array}{r} 2 \quad 20 \\ \quad 73 \\ + 30 \\ \hline \end{array}$$

$$\begin{array}{r} 3 \quad 75 \\ \quad 96 \\ + 25 \\ \hline \end{array}$$

$$\begin{array}{r} 4 \quad 13 \\ \quad 22 \\ + 24 \\ \hline \end{array}$$

$$\begin{array}{r} 5 \quad 32 \\ \quad 65 \\ + 48 \\ \hline \end{array}$$

$$\begin{array}{r} 6 \quad 46 \\ \quad 77 \\ + 56 \\ \hline \end{array}$$

$$\begin{array}{r} 7 \quad 28 \\ \quad 63 \\ + 42 \\ \hline \end{array}$$

$$\begin{array}{r} 8 \quad 39 \\ \quad 61 \\ + 18 \\ \hline \end{array}$$

$$\begin{array}{r} 9 \quad 31 \\ \quad 24 \\ \quad 11 \\ + 23 \\ \hline \end{array}$$

$$\begin{array}{r} 10 \quad 42 \\ \quad 24 \\ \quad 58 \\ + 24 \\ \hline \end{array}$$

$$\begin{array}{r} 11 \quad 20 \\ \quad 32 \\ \quad 18 \\ + 40 \\ \hline \end{array}$$

$$\begin{array}{r} 12 \quad 66 \\ \quad 44 \\ \quad 33 \\ + 11 \\ \hline \end{array}$$

$$\begin{array}{r} 13 \quad 25 \\ \quad 12 \\ \quad 25 \\ + 13 \\ \hline \end{array}$$

$$\begin{array}{r} 14 \quad 23 \\ \quad 54 \\ \quad 37 \\ + 16 \\ \hline \end{array}$$

$$\begin{array}{r} 15 \quad 49 \\ \quad 28 \\ \quad 28 \\ + 49 \\ \hline \end{array}$$

$$\begin{array}{r} 16 \quad 32 \\ \quad 45 \\ \quad 17 \\ + 68 \\ \hline \end{array}$$

Addition and Subtraction Within 1,000— Skills Practice

Name: _____

Add several 2-digit numbers.

Form B

$$\begin{array}{r} \mathbf{1} \quad 22 \\ 10 \\ + 32 \\ \hline \end{array}$$

$$\begin{array}{r} \mathbf{2} \quad 25 \\ 95 \\ + 25 \\ \hline \end{array}$$

$$\begin{array}{r} \mathbf{3} \quad 46 \\ 83 \\ + 54 \\ \hline \end{array}$$

$$\begin{array}{r} \mathbf{4} \quad 35 \\ 19 \\ + 21 \\ \hline \end{array}$$

$$\begin{array}{r} \mathbf{5} \quad 84 \\ 34 \\ + 45 \\ \hline \end{array}$$

$$\begin{array}{r} \mathbf{6} \quad 71 \\ 72 \\ + 15 \\ \hline \end{array}$$

$$\begin{array}{r} \mathbf{7} \quad 27 \\ 56 \\ + 43 \\ \hline \end{array}$$

$$\begin{array}{r} \mathbf{8} \quad 67 \\ 78 \\ + 22 \\ \hline \end{array}$$

$$\begin{array}{r} \mathbf{9} \quad 34 \\ 12 \\ 36 \\ + 13 \\ \hline \end{array}$$

$$\begin{array}{r} \mathbf{10} \quad 14 \\ 13 \\ 12 \\ + 11 \\ \hline \end{array}$$

$$\begin{array}{r} \mathbf{11} \quad 58 \\ 27 \\ 42 \\ + 27 \\ \hline \end{array}$$

$$\begin{array}{r} \mathbf{12} \quad 73 \\ 35 \\ 17 \\ + 45 \\ \hline \end{array}$$

$$\begin{array}{r} \mathbf{13} \quad 42 \\ 24 \\ 81 \\ + 18 \\ \hline \end{array}$$

$$\begin{array}{r} \mathbf{14} \quad 36 \\ 25 \\ 75 \\ + 63 \\ \hline \end{array}$$

$$\begin{array}{r} \mathbf{15} \quad 33 \\ 20 \\ 30 \\ + 44 \\ \hline \end{array}$$

$$\begin{array}{r} \mathbf{16} \quad 59 \\ 42 \\ 39 \\ + 21 \\ \hline \end{array}$$



Addition and Subtraction Within 1,000— Repeated Reasoning

Name: _____

Find place value patterns in addition.

1 $4 + 4 =$ _____

10 $100 + 50 =$ _____

2 $40 + 40 =$ _____

11 $100 + 50 + 100 + 50 =$ _____

3 $400 + 400 =$ _____

12 $150 + 150 =$ _____

4 $2 + 5 =$ _____

13 $400 + 20 =$ _____

5 $20 + 50 =$ _____

14 $400 + 20 + 400 + 20 =$ _____

6 $200 + 500 =$ _____

15 $420 + 420 =$ _____

7 $6 + 3 =$ _____

16 $300 + 40 =$ _____

8 $60 + 30 =$ _____

17 $300 + 40 + 300 + 40 =$ _____

9 $600 + 300 =$ _____

18 $340 + 340 =$ _____

How does finding $100 + 50 + 100 + 50$ help you find $150 + 150$?

Addition and Subtraction Within 1,000— Repeated Reasoning

Name: _____

Find place value patterns in subtraction.

1 $3 - 2 =$ _____

2 $30 - 20 =$ _____

3 $300 - 200 =$ _____

4 $9 - 5 =$ _____

5 $90 - 50 =$ _____

6 $900 - 500 =$ _____

7 $6 - 4 =$ _____

8 $60 - 40 =$ _____

9 $600 - 400 =$ _____

10 $400 - 100 =$ _____

11 $400 - 100 - 50 =$ _____

12 $400 - 150 =$ _____

13 $800 - 600 =$ _____

14 $800 - 600 - 20 =$ _____

15 $800 - 620 =$ _____

16 $700 - 300 =$ _____

17 $700 - 300 - 60 =$ _____

18 $700 - 360 =$ _____

Look at Problems 7, 8, and 9. What is the same about each answer? What is different? How does knowing that $6 - 4 = 2$ help you find $60 - 40$ and $600 - 400$?



